


Year 4 children, and year 3 children who would like a challenge, to complete this work sheet.

1 Use the array to complete the calculations.



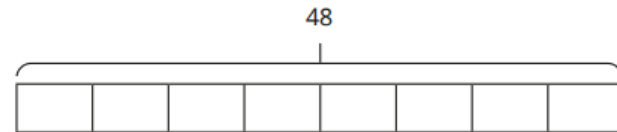
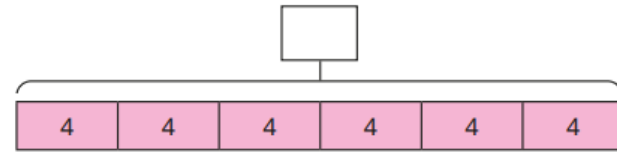
$$\square \times \square = \square$$

$$\square \times \square = \square$$

$$\square \div \square = \square$$

$$\square \div \square = \square$$

2 Complete the bar models.



3 Complete the calculations.

$$3 \times 7 = \square$$

$$\square = 10 \times 11$$

$$45 \div 9 = \square$$

$$\square = 14 \div 1$$

