

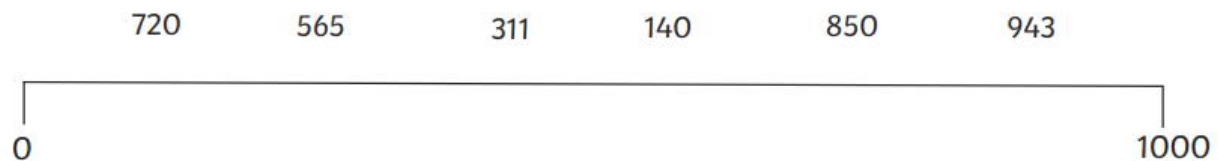
1. Fill in the missing numbers.

900	800		600	500		300	
230		250			280		300

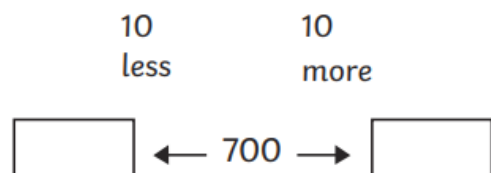
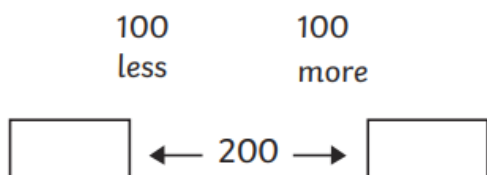
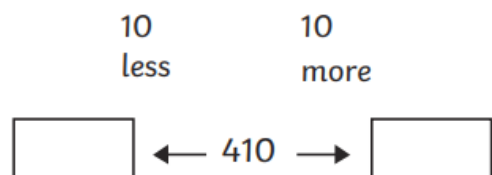
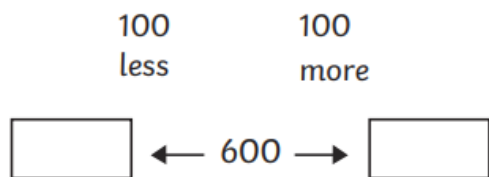
2. Estimate to fill in the missing numbers.



3. Estimate and mark the position of these numbers on the number line below.



4. Fill in the missing numbers.



previous
multiple of
100

next
multiple
of 100



previous
multiple of
10

next
multiple
of 10



previous
multiple of
100

next
multiple
of 100



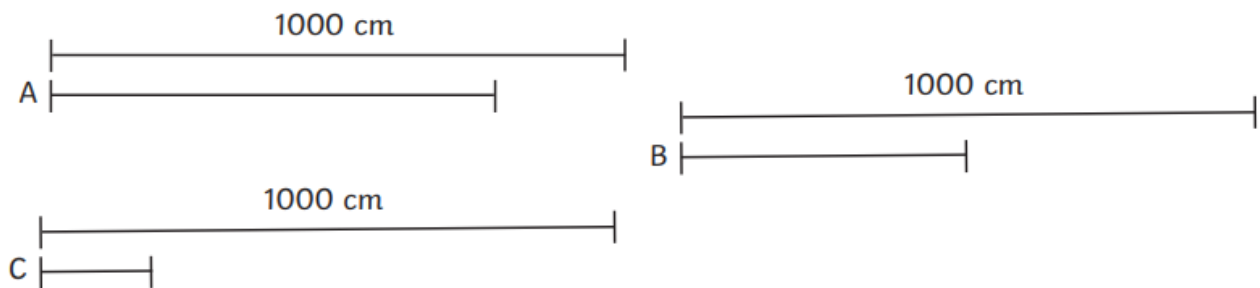
previous
multiple of
10

next
multiple
of 10



Challenge;

5. Estimate the length of lines A, B and C by comparing them to 1000cm lines.



A _____ cm

B _____ cm

C _____ cm

6. Estimate the volume, in ml, shown in this measuring jug.

