

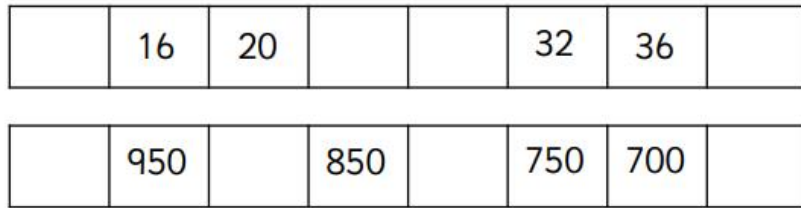
Beech Class Homework- Maths; Place Value- Year 3

Date: 4/10/24

1 How many marbles are there altogether?



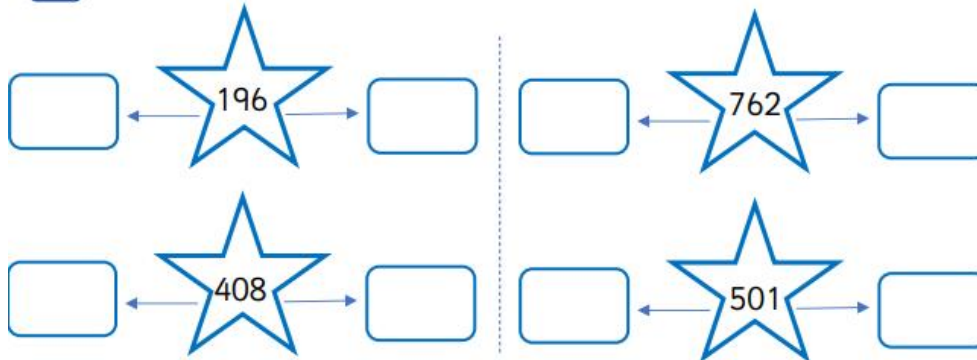
2 Complete the number tracks.



3 Tia counts in steps of 8 from 16. Circle all of the numbers she will say.



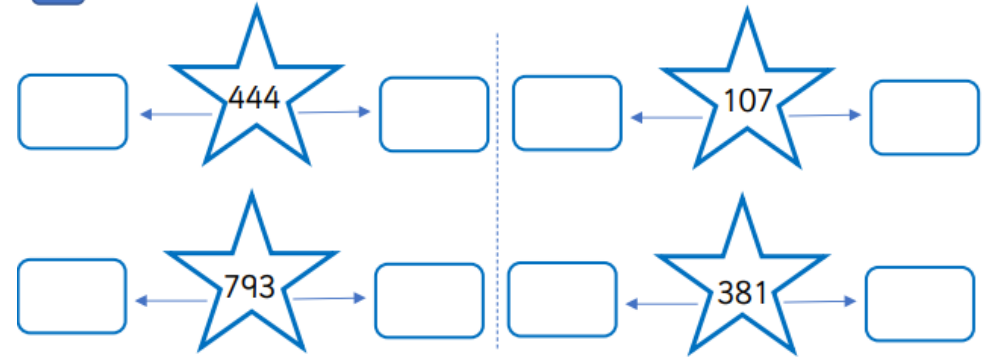
4 Find 10 more and 10 less than the given number.



5 There are four books in each box. How many books are there altogether?



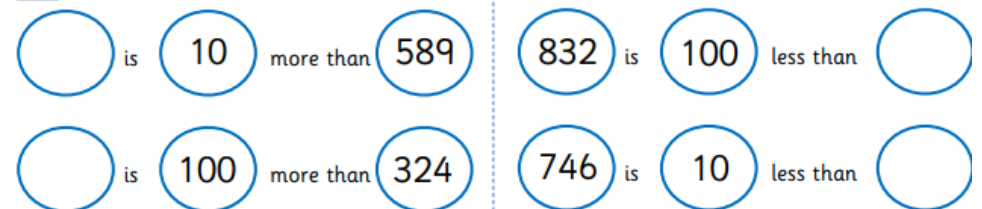
6 Find 100 more and 100 less.



7 Circle the mistake in the sequence.

0, 50, 100, 115, 200, 250, 300

8 Fill in the missing numbers.



**Challenge questions;**

12 Compare the numbers using comparison symbols.  $>$   $=$   $<$

576  213      876  678      901  910

10 tens  100      80 tens  80      300  3 tens

13 Leanna picks these number cards. What is the greatest number she can make?

2    5    3

14 Circle the smallest amount in each pair.

400 and 11

401

600 + 45

465

2 hundreds and 3 ones

23 tens

15 Malachi picks these number cards. What is the second smallest number he can make?

9    0    7

