


Quarter Past and Quarter To

1. Look at the clocks below. Use **to** and **past** to fill in the blanks.


A. The time is quarter 8.



What time will it be in an hour?

Quarter 9.

B. The time is quarter 5.






What time will it be in 30 minutes?




Quarter 6.

2. Draw the hour and minute hands to complete the clock patterns adding 15 minutes each time.

A.



B.



3. Wade the Wolf has his snack at quarter past 2. Do you agree with Wade? Complete the blank clock to show the time Wade will get his snack.



I can't get my snack because I am too early.

