


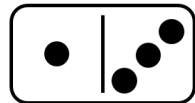
Roll the dice. What number have you landed on? This will go in the middle.  
For example, if you land on 4, the number 4 will go in the middle group.




fewer

4

more



- Then sort your dominoes into:
- dominoes that show 4
  - dominoes that have fewer than 4 spots
  - dominoes that have more than 4 spots



# #MathsEveryoneCan