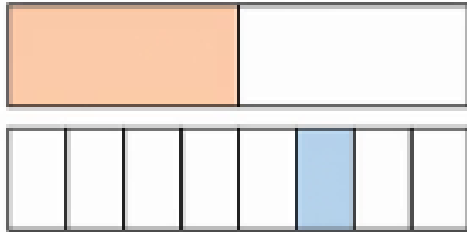



Year 5: Add Fractions within 1 (Activity)

Use the fraction strips to help you add together these pairs of fractions.

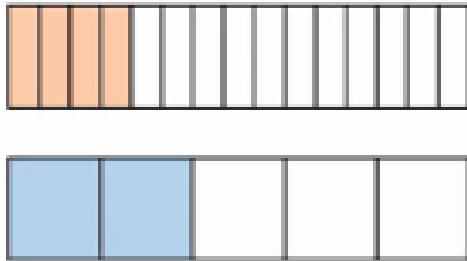
$$\frac{1}{2} + \frac{1}{8} =$$



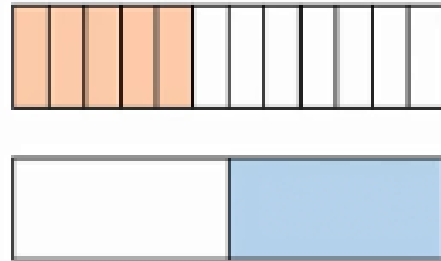
$$\frac{1}{6} + \frac{2}{3} =$$



$$\frac{4}{15} + \frac{2}{5} =$$




$$\frac{5}{12} + \frac{1}{2} =$$



Mrs Ashton's Challenge:

Complete these extension questions following the same method as above.

$$\frac{3}{7} + \frac{9}{21} =$$



$$\frac{3}{8} + \frac{3}{24} =$$

