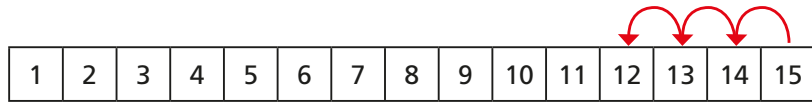



1 Ron uses a number track to work out  $15 - 3$



$15 - 3 = 12$

Use the number track to help you work out the subtractions.



a)  $14 - 3 =$

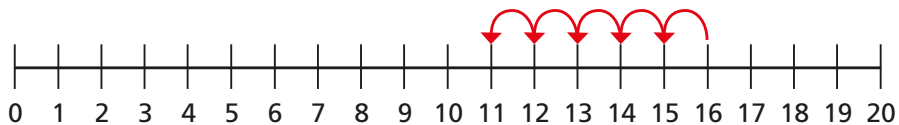
c)  $14 - 4 =$

b)  $15 - 4 =$

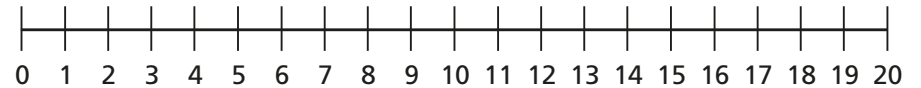
2 Use the number lines to help you.



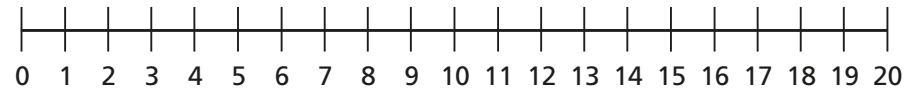
a)  $16 - 5 =$



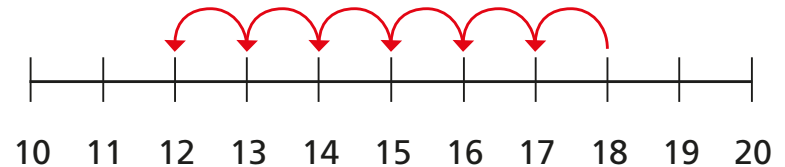

b)  $18 - 4 =$



c)  $19 - 5 =$



3 Sam uses a number line to work out a subtraction.



Complete Sam's subtraction.  -  =